














QUESTION BANK

Grade 2- MATHEMATICS

Chapter 9- Money

Q.No.	Questions	Mark
1	<p>Match the Following</p> <div style="display: flex; align-items: flex-start;"> <div style="margin-right: 20px;"> <p>(i) </p> <p>(ii) </p> <p>(iii) </p> <p>(iv) </p> <p>(v) </p> <p>(vi) </p> </div> <div> <p>1. ₹ 100</p> <p>2. ₹ 5</p> <p>3. 50p</p> <p>4. ₹ 500</p> <p>5. ₹ 10</p> <p>6. ₹ 50</p> </div> </div> <p>Answer:</p> <div style="display: flex; align-items: flex-start;"> <div style="margin-right: 20px;"> <p>(i) </p> <p>(ii) </p> <p>(iii) </p> <p>(iv) </p> <p>(v) </p> <p>(vi) </p> </div> <div> <p>1. ₹ 100</p> <p>2. ₹ 5</p> <p>3. 50p</p> <p>4. ₹ 500</p> <p>5. ₹ 10</p> <p>6. ₹ 50</p> </div> </div>	

2 Tick (✓) the required money to buy the objects



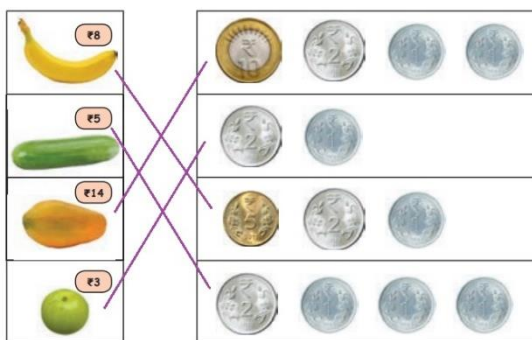
Answer:



3 Match the objects with its correct money value.



Answer :



4



Solve the following question

- Rahul bought balloons for Rs 20 and chocolates for Rs.30. How much money does he gave to pay to the shopkeeper?

Answer : The cost of balloons = Rs. 20
The cost of chocolates = Rs. 30
The amount Rahul gave
to the shopkeeper = Rs. 50

5

Read the questions carefully and answer them in the space given.

Sandeep bought a  for Rs 10 and a  for Rs 15.

a) He Spent Rs altogether.

A  Cost Rs 30 . Sid bought   .

b) He Paid Rs

Answer :

a) 25 b) 60